


# Year 3 Time Worksheet

1. Read the watches and complete the sentences. First one is done for you.



50 minutes past 1.

....minutes past ....

....minutes past....

10 minutes to 2.

.....minutes to.....

....minutes to.....

Short form 1:50

Short form.....

Short form.....

2. Write (T) for True and (F) for False statement in the box. First one is done for you.

A. The minute hand completes 1 round in 1 hour.

T

B. The hour hand completes 24 rounds in 1 day.

C. The minute hand completes 2 rounds in 1 day,

D. The minute hand takes 45 minutes to move from 1 to 9.

E. The hour hand takes 10 minutes to move from 4 to 5.

# Year 3 Time Worksheet

**3. How many minutes does the minute hand take to move from:**

- |                           |                           |                           |
|---------------------------|---------------------------|---------------------------|
| A. 1 to 2<br>.....minutes | B. 3 to 5<br>.....minutes | C. 6 to 9<br>.....minutes |
|---------------------------|---------------------------|---------------------------|

**4. Convert into hours and minutes:**

- |                |                |                |
|----------------|----------------|----------------|
| A. 120 minutes | B. 360 minutes | C. 80 minutes  |
| D. 135 minutes | E. 93 minutes  | F. 220 minutes |

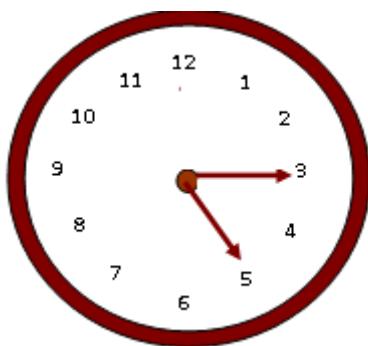
**5. Convert into hours:**

- |           |           |                   |
|-----------|-----------|-------------------|
| A. 2 days | B. 5 days | C. 6 days 4 hours |
|-----------|-----------|-------------------|

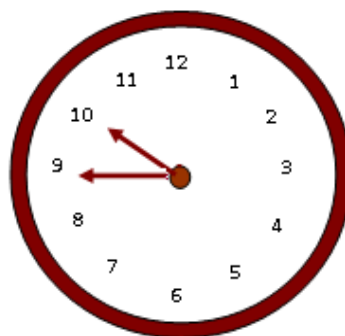
**6. How many hours does the hour hand take to move from**

- |            |           |           |
|------------|-----------|-----------|
| A. 10 to 1 | B. 3 to 9 | C. 1 to 8 |
|------------|-----------|-----------|

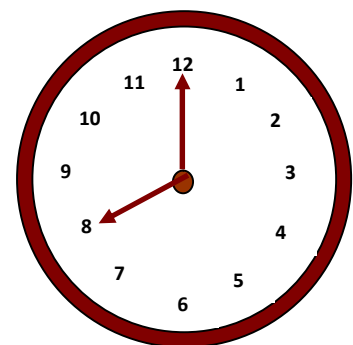
**7. Time words: o'clock, half, quarter, past**



It is  four



It is  to 10



It is