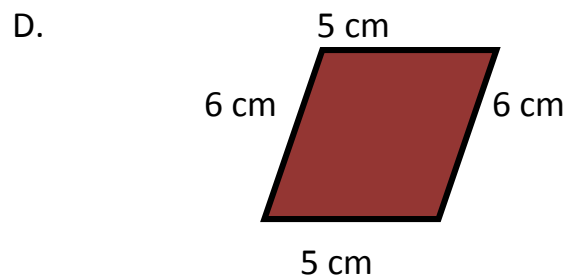
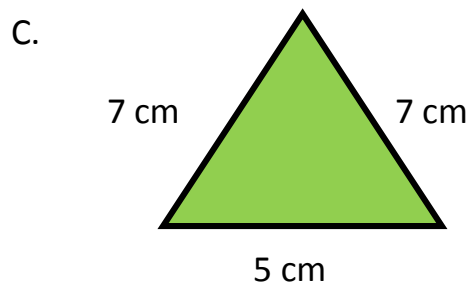
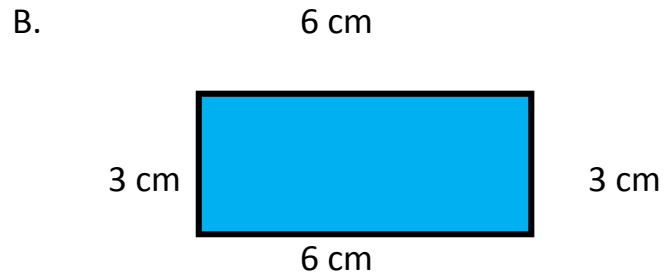
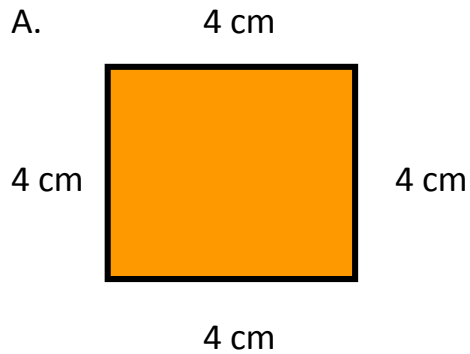


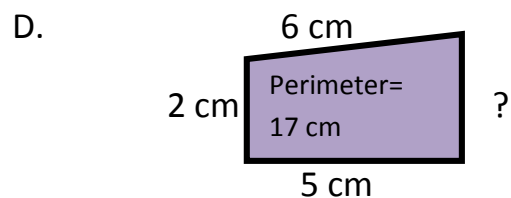
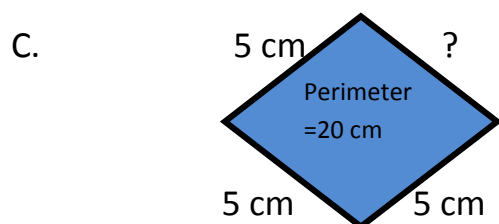
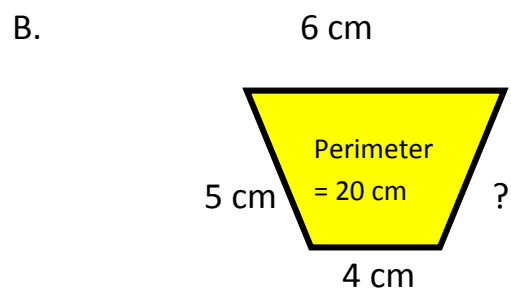
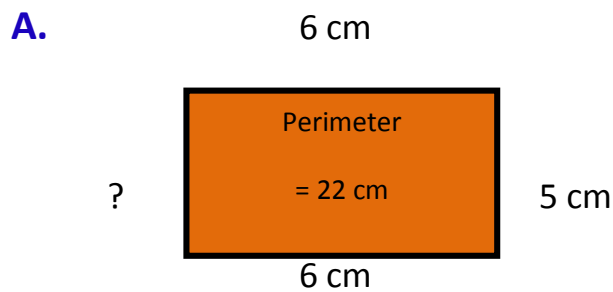
Year 3 Measurement Worksheet



1. Find the perimeter of the following figures:



2. Work out the missing length of each of the following:



Year 3 Measurement Worksheet



Find the area and perimeter of the following rectangles:

<p>3. 9 cm wide, 2 cm long</p> <p>perimeter =</p> <p>area =</p>	<p>4. 3 m wide, 7 m long</p> <p>perimeter =</p> <p>area =</p>	<p>5. 8 cm wide, 4 cm long</p> <p>perimeter =</p> <p>area =</p>
<p>6. 20 mm wide, 6 mm long</p> <p>perimeter =</p> <p>area =</p>	<p>7. 11 mm wide, 3 mm long</p> <p>perimeter =</p> <p>area =</p>	<p>8. 9 m wide, 8 m long</p> <p>perimeter =</p> <p>area =</p>
<p>9. 16 cm wide, 2 cm long</p> <p>perimeter =</p> <p>area =</p>	<p>10. 5 mm wide, 3 mm long</p> <p>perimeter =</p> <p>area =</p>	<p>11. 9 m wide, 40 m long</p> <p>perimeter =</p> <p>area =</p>
<p>12. 11 cm wide, 3 cm long</p> <p>perimeter =</p> <p>area =</p>	<p>13. 11 cm wide, 2 cm long</p> <p>perimeter =</p> <p>area =</p>	<p>14. 16 cm wide, 4 cm long</p> <p>perimeter =</p> <p>area =</p>