

Year 3 Data Worksheet



1. Look at the following table:

Donations		
Person	Clean water	Orphan education
Leela	\$7	\$16
Anne	\$15	\$17
George	\$12	\$7

How much more did George donate to clean water than to Orphan education?

2. Look at the following table:

Movie ticket prices		
Movie	Child	Senior
Michigan	\$6	\$7
Oakland	\$7	\$9
California	\$9	\$12
Central Park	\$4	\$6
Seattle	\$6	\$7

How much more does a senior ticket cost at the California movie than at the Michigan movie?

3. Look at the following table:

Butter consumption per capita (kg)		
Country	2000	2010
Japan	11	11
China	10	10
Austria	10	17
France	9	10
Canada	10	11

How much butter was consumed per capita in China in 2000?

Year 3 Data Worksheet













4. Look at the picture.

Which table shows the number of cakes, cupcakes and apples?















A

B








					
					
					

5. Jordan went on a picnic and brought five apples, two carrots, and three crackers. She made a picture graph of the food she brought. Which is her graph?

A

apples					
carrots					
crackers					

B

apples					
carrots					
crackers	